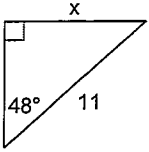


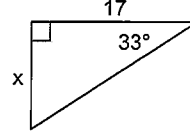
Trig

Find the missing side. Round to the nearest tenth.

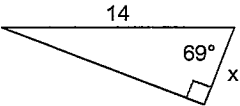
1)



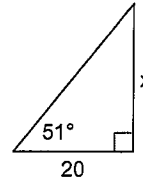
2)



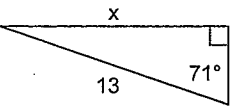
3)



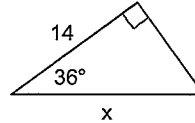
4)



5)

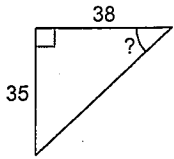


6)

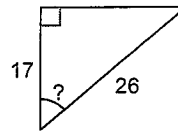


Find the measure of the indicated angle to the nearest degree.

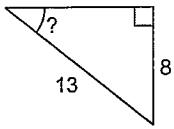
7)



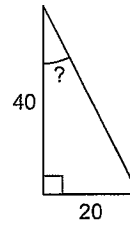
8)



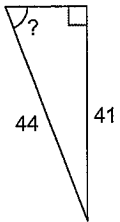
9)



10)



11)



12)

